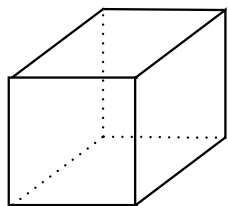


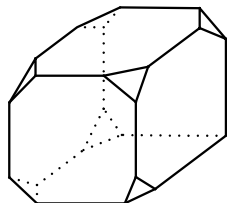
## :: Viziune în spațiu

**Instrucțiuni:** Completați spațiile punctate cu numărul total de fețe al fiecărui corp geometric.

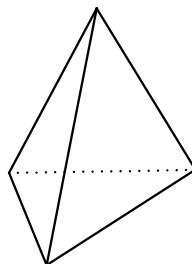
**Timp limită:** 3 minute



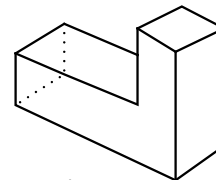
1. \_\_\_\_



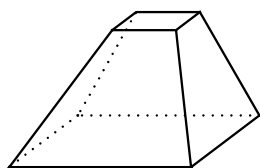
2. \_\_\_\_



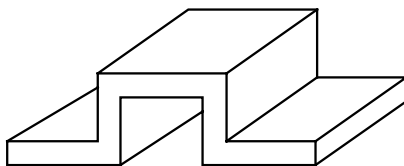
3. \_\_\_\_



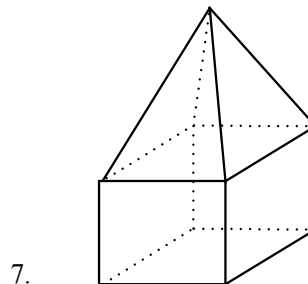
4. \_\_\_\_



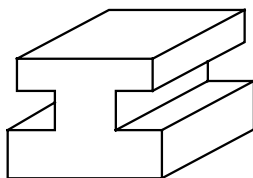
5. \_\_\_\_



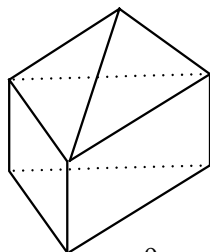
6. \_\_\_\_



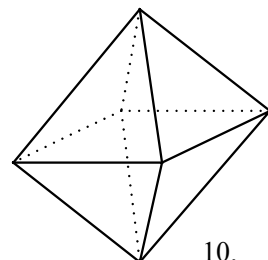
7. \_\_\_\_



8. \_\_\_\_



9. \_\_\_\_



10. \_\_\_\_

---

## :: Soluții viziune în spațiu

---

1. 6
2. 13
3. 4
4. 8
5. 6
6. 14
7. 9
8. 14
9. 7
10. 8

Adunați câte 2 puncte pentru fiecare răspuns corect.

**CLASIFICARE:**

Foarte bun	20p
Bun	10p – 19p
Satisfăcător	0p – 9p